


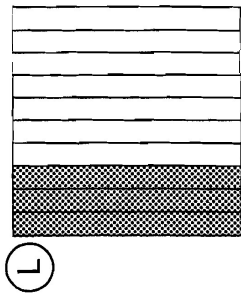


What Do Gorillas Eat For Lunch?

Do each exercise and find your answer at the bottom of the page. Write the letter of the exercise in the box above its answer.



I. Write a decimal for the amount shaded.



II. Write the decimal.

(C) seven tenths

(E) 91 hundredths

(I) two and six tenths

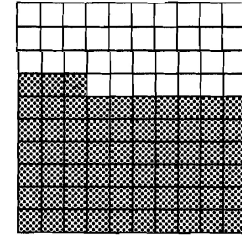

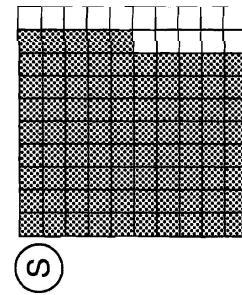
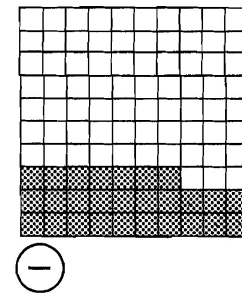
(D) 15 and 2 tenths

(G) 7 and 34 hundredths

(H) 12 and 72 hundredths

(E) four hundredths

(N) 3 and 9 hundredths



III. Write a decimal for each lettered point.

